

9 Times Table Practice

1. Match each calculation to the correct answer.

$9 \times 5 =$

72

$54 \div 9 =$

11

$8 \times 9 =$

63

$99 \div 9 =$

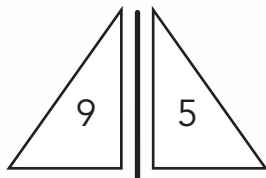
45

$7 \times 9 =$

6



2. Complete the number sentences using the numbers on each boat. One sentence in each set has been done for you.



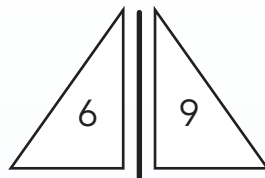
45

$\square \times \square = \square$

$\square \times \square = \square$

$45 \div 9 = 5$

$\square \div \square = \square$



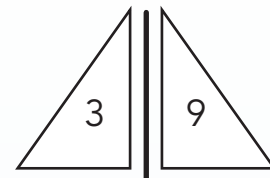
54

$\square \times \square = \square$

$\square \times \square = \square$

$\square \div \square = \square$

$54 \div 6 = 9$



27

$\square \times \square = \square$

$9 \times 3 = 27$

$\square \div \square = \square$

$\square \div \square = \square$

3. Choose the right path for the mouse to get to the cheese using only multiples of 9.

