

## Test B: Data

Mrs Honey's shop has been busy. This table shows items sold last month. Use it to answer the following questions.

| WEEK | Sunhats | Umbrellas | Jigsaws | Sunglasses | Deckchairs |
|------|---------|-----------|---------|------------|------------|
| 1    | 42      | 2         | 3       | 36         | 27         |
| 2    | 12      | 39        | 20      | 8          | 1          |
| 3    | 4       | 60        | 31      | 1          | 2          |
| 4    | 56      | 0         | 2       | 61         | 39         |

1 How many more sunhats were sold in Week 4 than in Week 3?




---

2 How many fewer deckchairs were sold in Week 1 than in Week 4?




---

3 How many sunglasses were sold in total?




---

4 How many items were sold in Week 2?




---

5 Which was the most popular item sold?





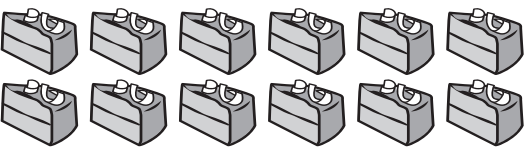



---

6 In which week were the most items sold?




---

There are 30 children in Year 4. They hold a Bake Sale to raise money and they sell each item for 20p. This chart shows the baked goods that were sold. Use it to answer the following questions.

|                       |   |
|-----------------------|---|
| Lemon cake slices     |   |
| Fruit cake slices     |    |
| Chocolate cake slices |   |
| Flapjack              |   |
| Scone                 |  |

7 Which two types of baked goods sold the same amount?




---

8 How many more flapjacks than pieces of fruit cake were sold?




---

9 How many fewer scones were sold than pieces of chocolate cake?




---

10 How much money was raised by selling the two most popular items?




---

11 How much money was raised altogether?




---

Total  11

# Answers

---

## Test B: Data

- 1 52:  $56 - 4 = 52$
- 2 12:  $39 - 27 = 12$
- 3 106:  $36 + 8 + 1 + 61 = 106$
- 4 80:  $12 + 39 + 20 + 8 + 1 = 80$
- 5 Sunhats: sunhats = 114,  
umbrellas = 101, jigsaws = 56,  
sunglasses = 106, deckchairs = 69
- 6 Week 4: Week 1 = 110, Week 2 = 80,  
Week 3 = 98, Week 4 = 158
- 7 6 pieces of lemon cake and 6 scones  
were sold.
- 8 11:  $15 - 4 = 11$
- 9 6:  $12 - 6 = 6$
- 10 £5.40:  $12 + 15 = 27$ ;  $27 \times 20\text{p} = \text{£}5.40$
- 11 £8.60:  $43 \times 20\text{p} = \text{£}8.60$