


Shapes and Measures: Challenge 2

- 1 Look up the definition of 'shape' on page 47 of the *Oxford First Illustrated Maths Dictionary*. Some shapes can be flat and some solid. Look at the shapes below and list them under the correct headings.



circle



cone



oval




cylinder




hexagon



octagon



cube



triangle

Flat	Solid

- 2 Can you think of any other shapes that are flat or solid? Use the dictionary to help you and then add your ideas under the correct headings.



Look up the different shapes in the dictionary to help you.