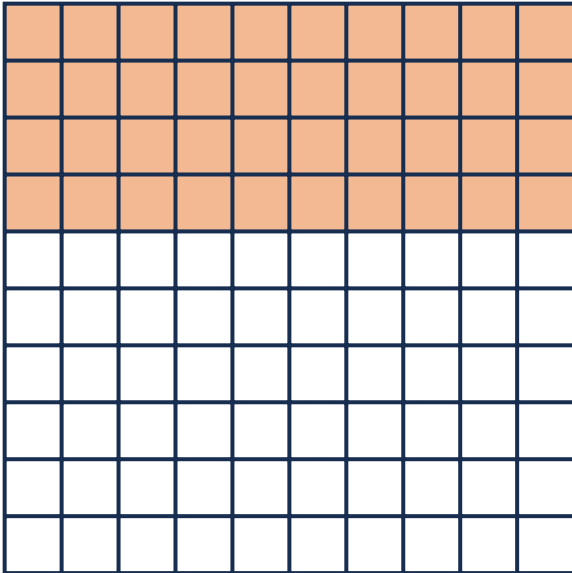



Question 1

How many hundredths have been shaded?

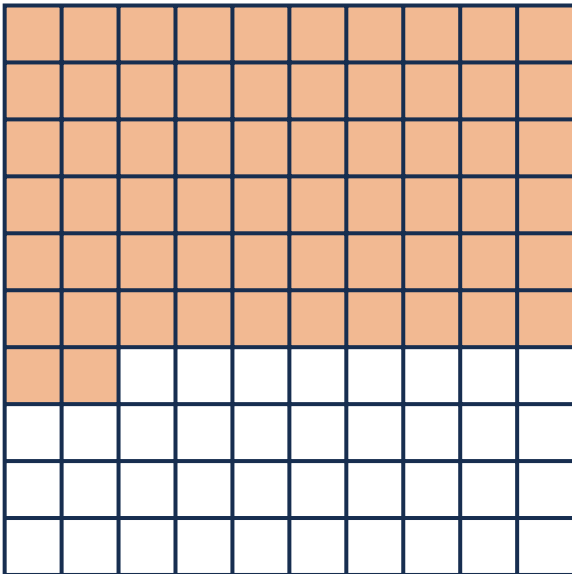
a


 hundredths

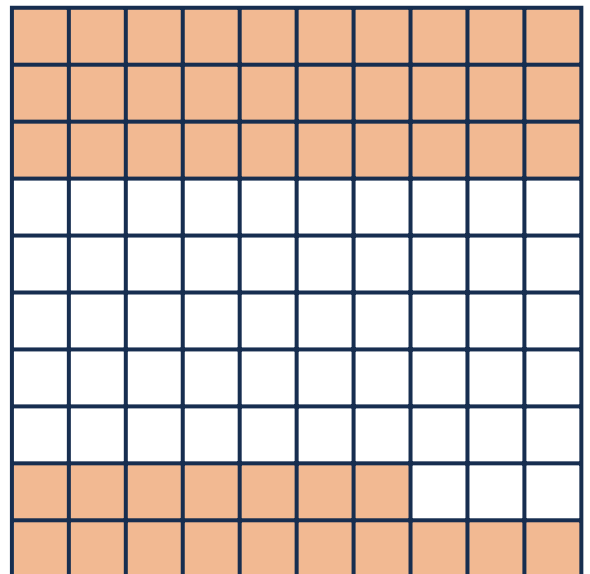
b


 hundredths

c


 hundredths

d


 hundredths



Question 2

Use this hundred square to help you answer these questions.

a hundredths
make one whole.

b tenths
make one whole.

c 10 hundredths make
 tenth.



d Can you colour in 42 hundredths on the hundred square?

Question 3

Can you write these numbers in numerals on the place value grids?

a Zero point eight seven

T	O	t	h

b Four point zero three

T	O	t	h

c Forty-two point eight

T	O	t	h

d Nineteen point seven five

T	O	t	h

Question 4

a Can you solve the number puzzle?

My number is greater than 8,
but less than 10.

My number has 2 decimal places.


The hundredths number
is even.

The tenths number is 7.

The ones number is odd.

The hundredths number is
greater than the tenths number.

What is my number?



b Can you make your own
number puzzle?

