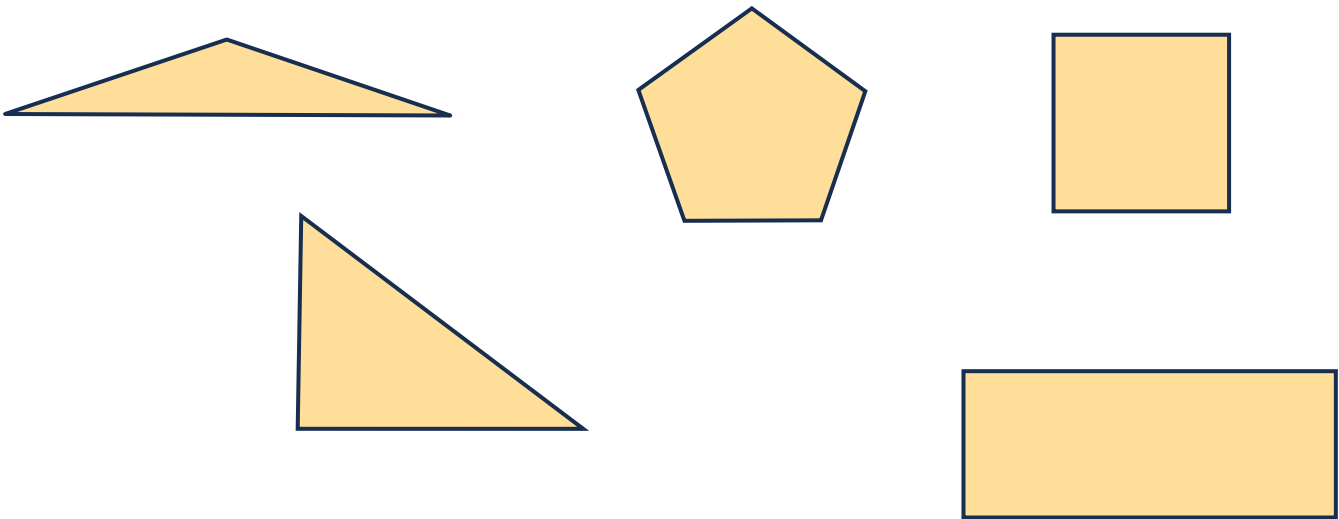


Angles and shapes

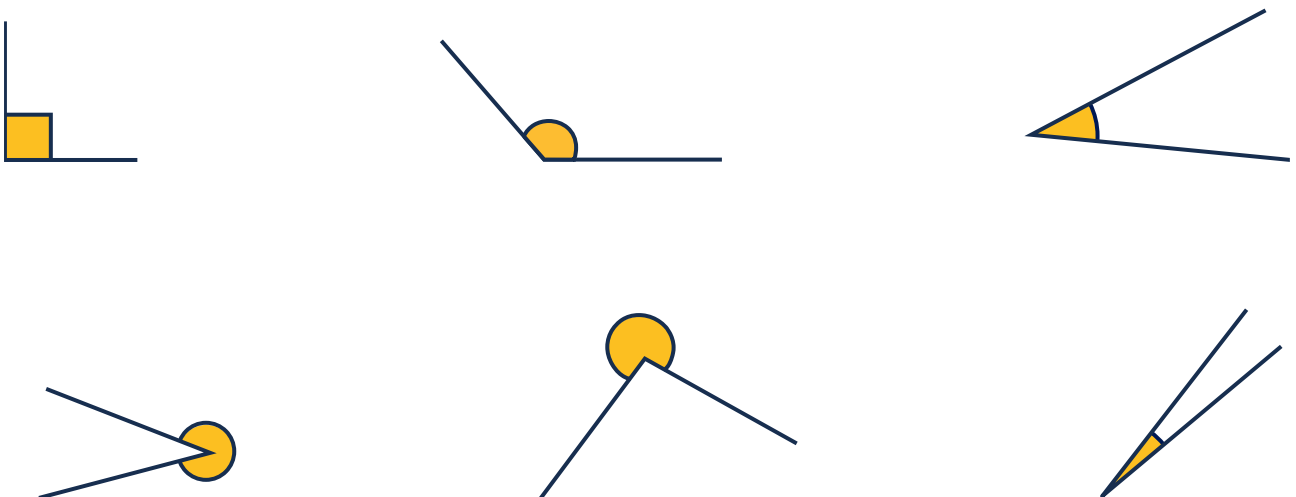
Question 1

Here are some 2D shapes. Circle all the shapes that have right angles.



Question 2

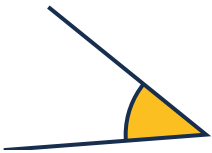
Here are some angles. Circle all the angles that are **greater** than a right angle.



Angles and shapes

Question 3


Here are some angles. Some are acute angles, some are right angles, some are obtuse angles. Can you label each one?



















Angles and shapes

Question 4

- a Look at the letters below. Circle all the letters that have perpendicular lines.

T A F L X H

- b Which of these letters has perpendicular lines **and** parallel lines?

- c Can you think of two more letters that have parallel lines?



Angles and shapes

Question 6

Can you find the shapes that fit each description?

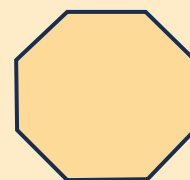
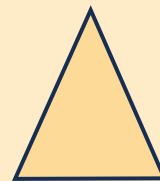
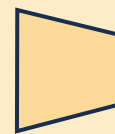
The shape has two vertical and two horizontal lines



The shape has two vertical lines, but no horizontal lines



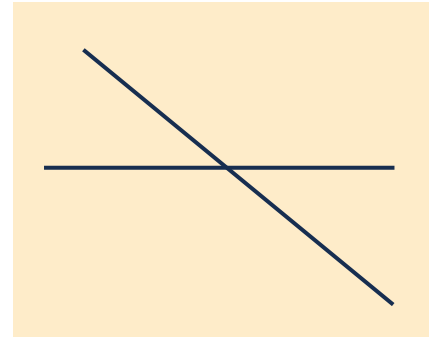
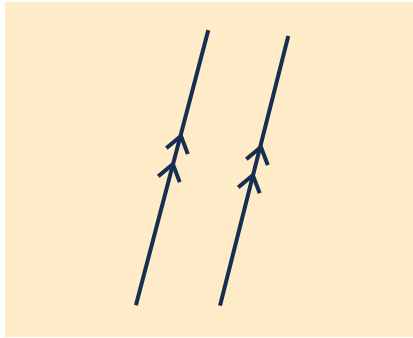
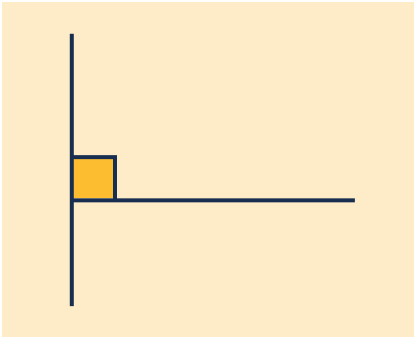
The shape has no parallel lines



Angles and shapes

Question 7

Here are some pairs of lines. Can you match each pair to a sentence?



The lines are parallel

The lines are perpendicular

There is a horizontal line but no vertical line

Question 8

Look at the shape. Tick which **two** sentences are true.



The shape has vertical lines.

The shape has horizontal lines.

The shape has parallel lines.

The shape has perpendicular lines.

