

Question 1

Complete the gaps in this table showing money amounts.

125p	£1.25
<input type="text"/> p	£2.00
73p	£ <input type="text"/>
<input type="text"/> p	£3.05
407p	£ <input type="text"/>
<input type="text"/> p	£0.61
1022p	£ <input type="text"/>

Question 2

What coins could you use to make the following amounts?
Draw your answers.

a £2.75



Money

b 33p

c £5.50

Question 3

Match the two price tags that add together to make £5 and the two price tags that add together to make £10.

£5.50

£2.50

£1.75

£0.55

£4.50

£1.50

£3.25

£6.50

£2



Money

Question 4

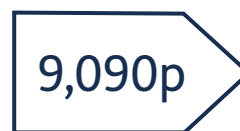
Anya wants to buy a cake. The cake costs £1.

Draw five coins that Anya could use to make exactly £1. You can use the same coin more than once.

Can you think of another combination of five coins that Anya could have used?

Question 5

Write down these prices in order from largest to smallest.



>

>

>



Money

Question 6

Jack has £3.25. Padma has 318p. You have these coins:



a How much money do you have?

b Who has the most money? Who has the least money?

Question 7

Esther has £20. Round to the nearest pound to estimate whether she has enough money to buy one of each toy at the toy stall.

- Yo-yo: £1.02
- Juggling clubs: £3.89
- Flying disc: £5.66
- Bouncy ball: £0.90
- Teddy bear: £7.32



Money


Question 8

Amir goes shopping with £15. He buys a box of eggs for £2.89, a carton of orange juice for £1.23 and a punnet of strawberries for £3.70. Round to the nearest pound to estimate how much money Amir has left.

Question 9

Can you solve these money problems?


a



A big bag of apples cost £5.75. I pay for them with £10. How much money will I get back?



Money

b

I have £3.20 and my friend Leah has £5. Leah gives me 90p. How much money do we both have now?

c

A book of 6 stamps costs £3.60. How many stamps can I buy with £14?

d

I want to share £2.50 with my five friends. How much does everyone get?

